

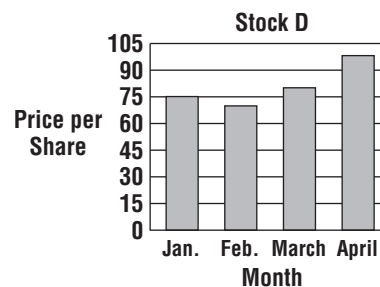
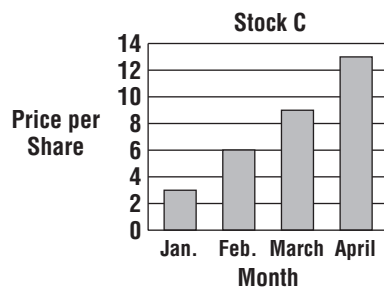
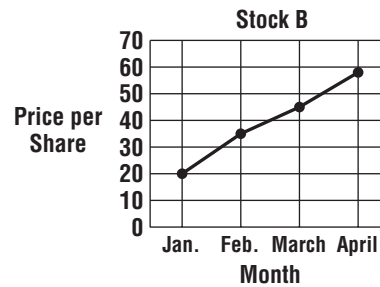
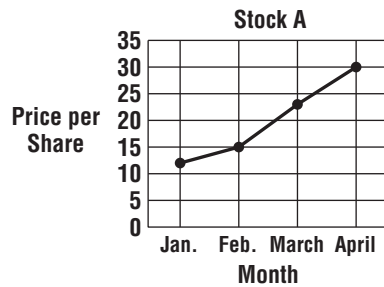


Name \_\_\_\_\_ Date \_\_\_\_\_

## Chapter 2 Review

### Stock Market Game

In a stock market game, teams of students must pick a stock to “buy.” After several months, the team whose stock gains the most value wins. Teams make their decisions about which stocks to buy based on the price of the stock over the past several months. Use the information below to help your team pick the best stock.



1. Read the graphs above. By about how much did the value of each stock increase from January to April?
2. To win the stock market game, you want to buy the stock that will increase in value the most over the next several months. Based on the amount that each stock has increased in value, which stock would you want your team to buy? Explain.

Answers are located on p. 108.