

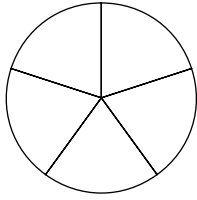
Name _____ Date _____

Chapter 6 Review

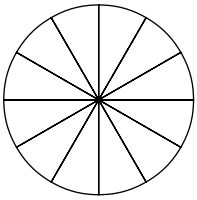
Pie-Eating Contest

You've just entered a pie-eating contest, but this contest is a little different from most. You must eat the correct amount of pie in each round of the contest to win. The instructions for each round tell you how much pie to eat. Shade the blank pies below to show how much pie you would eat in each round.

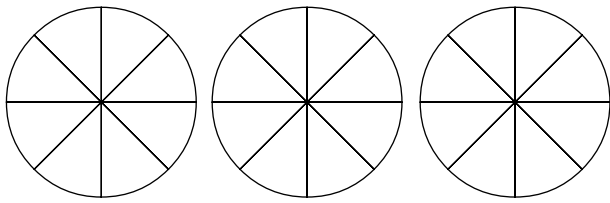
Round 1: Eat $\frac{2}{5} + \frac{1}{5}$ of the pie.



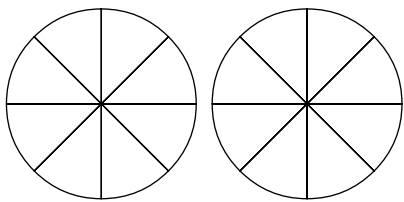
Round 2: Eat $\frac{2}{3} - \frac{1}{4}$ of the pie.



Round 3: Eat $1\frac{1}{2} + 1\frac{3}{8}$ of the pies.



Round 4: Eat $2\frac{1}{4} - 1\frac{7}{8}$ of the pies.



Answers are located on p. 109.