

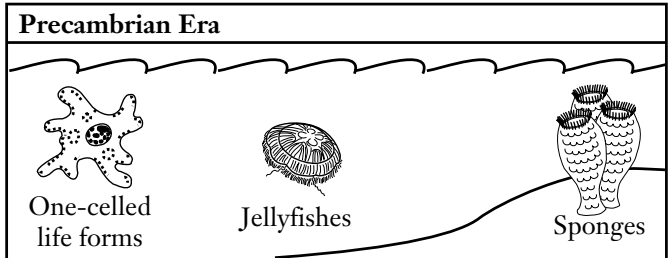
CHAPTER 17 THE HISTORY OF LIFE

Section 17.1 The Record of Life

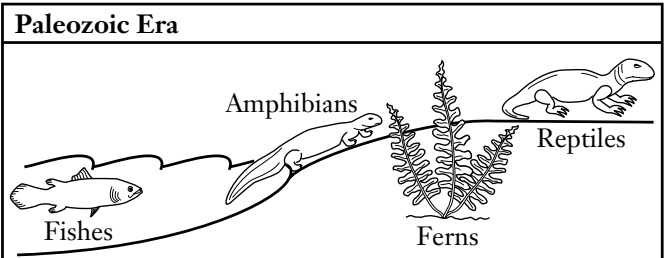
Section 17.2 The Origin of Life

Study the Diagram

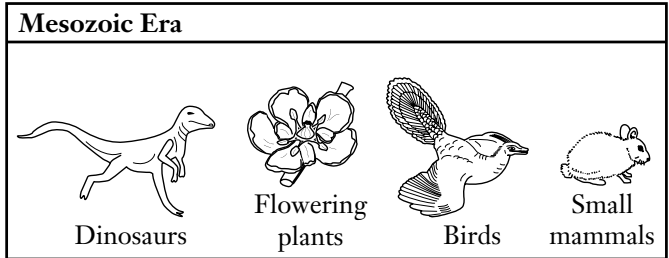
Study the diagram. Then fill in each blank in the sentences below with the correct era.



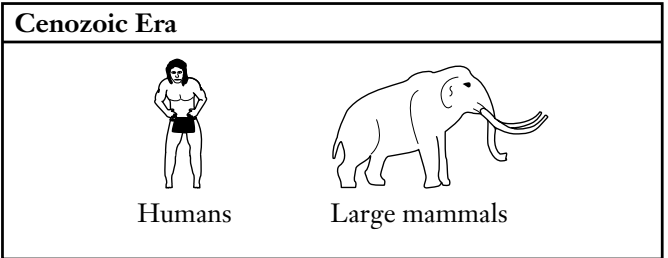
4.6 billion years ago → 544 million years ago



544 million years ago → 245 million years ago



245 million years ago → 66 million years ago



66 million years ago → now

1. Ferns and reptiles lived in the _____ era.
2. Humans and other large mammals appeared in the _____ era.
3. Dinosaurs, birds, and flowering plants lived in the _____ era.
4. The earliest life forms appeared in the _____ era.