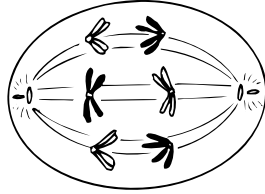


Chapter 4**REINFORCEMENT**

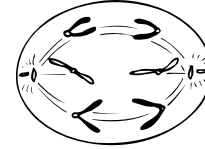
Use with Section 2

● Sexual Reproduction and Meiosis


Label the following diagrams of the stages of meiosis.



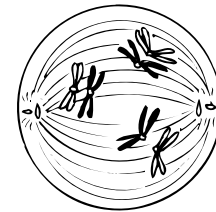
1. _____



2. _____



3. _____



4. _____

Answer the following questions.

5. In what way is meiosis II similar to mitosis? _____

6. How are gametes different from other cells in the body? _____

7. What happens during fertilization? _____
8. What is the total number of paired chromosomes in a body cell called? _____

9. Do centromeres divide at anaphase I or II? _____
10. Starting with one cell, how many haploid sperm cells are formed after both phases of meiosis? _____