

Chapter 16

Use with Section 1

REINFORCEMENT

● What is climate?




In each blank on the map below, identify the factor that can affect the climate nearby. Then in the spaces beneath the map explain the effect of these factors.

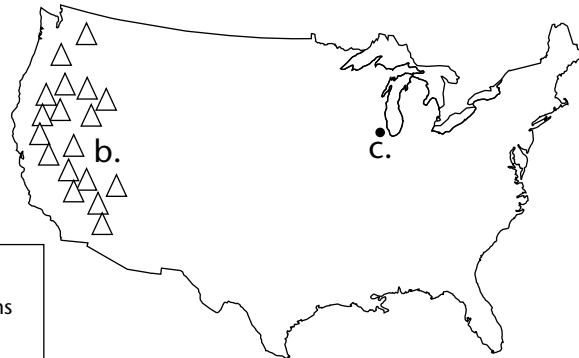
- a. _____
- b. _____
- c. _____

a. 

b. 

c. 

Key	
	Mountains
	City
	Ocean



- a. _____

- b. _____

- c. _____

