

Chapter 18

Use with Section 2

REINFORCEMENT

• Earth's Moon

Identify each phase of the moon in FIGURE 1 by writing its name on the line beneath the phase shown. Then answer the questions that follow on the lines provided.





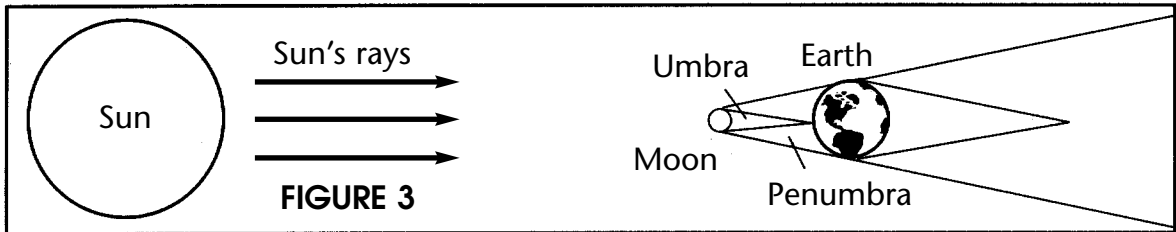



FIGURE 1



1. _____
 - _____
 - _____
 - _____
 - _____
2. What phase occurs between the full moon and the third quarter?
 3. What phase occurs between the third quarter and the new moon?
 4. What phase occurs between the new moon and the first quarter?
 5. What phase occurs between the first quarter and the full moon?

Identify FIGURES 2 and 3 as lunar or solar eclipses. Then explain why each type of eclipse happens and who would be able to see the eclipse.



6. **FIGURE 2:** _____
 - _____
 - _____
 - _____
7. **FIGURE 3:** _____
 - _____
 - _____
 - _____