

Chapter 10

Use with Section 2

REINFORCEMENT

• Types of Volcanoes

Identify each form of volcano and then fill in the chart with the appropriate information about each form.

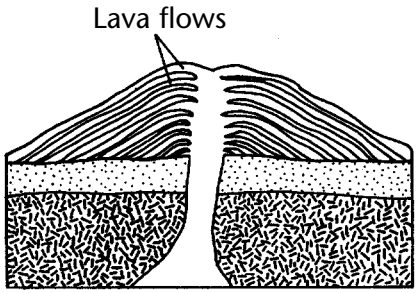


FIGURE 1

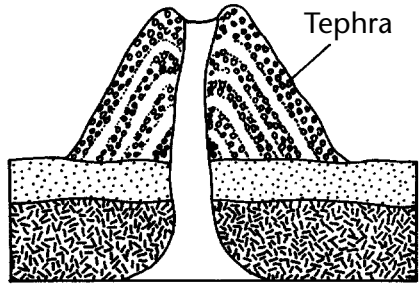


FIGURE 2

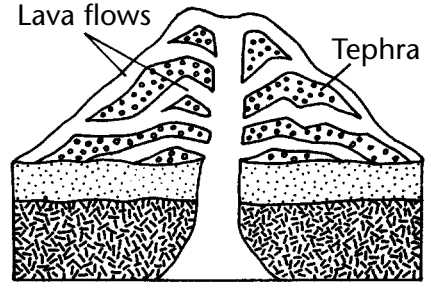


FIGURE 3

Form of volcano	Type of magma	Shape of volcano	Materials in volcano
1.			
2.			
3.			

Answer the following questions on the lines provided.

- What is the relationship between the amount of gases in magma and the explosiveness of a volcanic eruption? _____

- What is the relationship between the silica content of magma and the explosiveness of a volcanic eruption? _____

