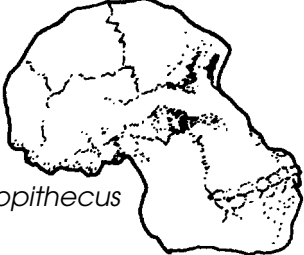
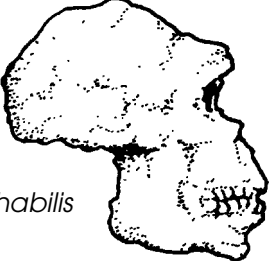
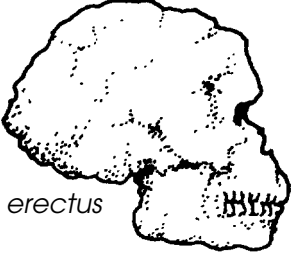
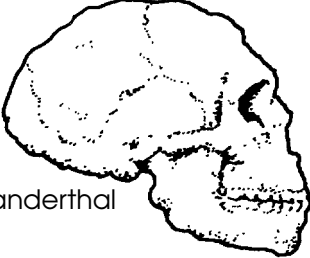
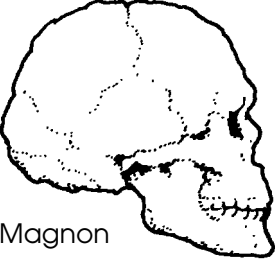


**Chapter 20**

Use with Section 3

**ENRICHMENT****● Primate Evolution****Change over Time**

Use your textbook and references to complete the table below with information concerning fossil evidence of early humans. You may wish to plot the location of these and other humanlike fossils that you may read about.

Example	Age	Description/Location
 <p><i>Australopithecus</i></p>		
 <p><i>Homo habilis</i></p>		
 <p><i>Homo erectus</i></p>		
 <p>Neanderthal</p>		
 <p>Cro-Magnon</p>		