


Chapter 20

Use with Section 2


REINFORCEMENT

● Evidence for Evolution

Study the sketches below, and in the lines provided, tell how each fossil was formed.



a. _____



b. _____




c. _____



d. _____



e. _____



f. _____

Answer the following questions.

1. In which type of rock are most fossils found? _____

2. What two methods are used to determine the age of a rock or fossil? _____

3. Why is the fossil record not complete? _____

4. List other evidences of evolution.

a. _____

c. _____

b. _____

d. _____