

Chapter 25

Use with Section 2

REINFORCEMENT

● Earth's Moon

Identify each phase of the moon in FIGURE 1 by writing its name on the line beneath the phase shown. Then answer the questions that follow on the lines provided.





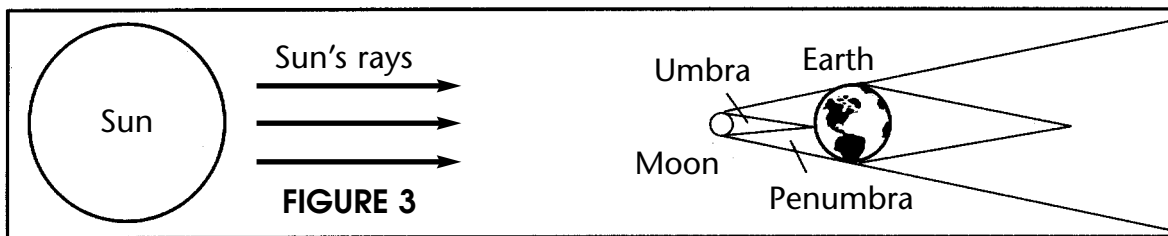



FIGURE 1



- \_\_\_\_\_
  - \_\_\_\_\_
  - \_\_\_\_\_
  - \_\_\_\_\_
  - \_\_\_\_\_
2. What phase occurs between the full moon and the third quarter?  
\_\_\_\_\_
  3. What phase occurs between the third quarter and the new moon?  
\_\_\_\_\_
  4. What phase occurs between the new moon and the first quarter?  
\_\_\_\_\_
  5. What phase occurs between the first quarter and the full moon?  
\_\_\_\_\_

Identify FIGURES 2 and 3 as lunar or solar eclipses. Then explain why each type of eclipse happens and who would be able to see the eclipse.



6. FIGURE 2: \_\_\_\_\_  
\_\_\_\_\_  
\_\_\_\_\_
7. FIGURE 3: \_\_\_\_\_  
\_\_\_\_\_  
\_\_\_\_\_