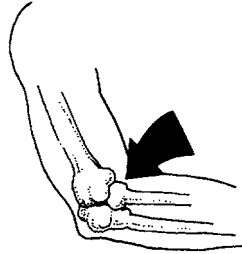


**Chapter 5**

Use with Section 1

**REINFORCEMENT****● The Skeletal System**

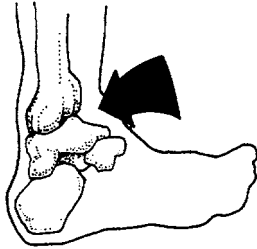
Listed below are the four kinds of movable joints. Label the illustrations.



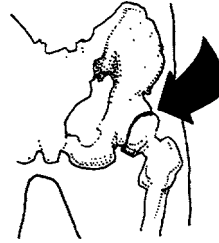
1. \_\_\_\_\_



2. \_\_\_\_\_



3. \_\_\_\_\_



4. \_\_\_\_\_

Describe each type of joint.

5. pivot joint: \_\_\_\_\_

6. ball-and-socket joint: \_\_\_\_\_

7. hinge joint: \_\_\_\_\_

8. gliding joint: \_\_\_\_\_

List the five major functions of the skeletal system.

9. \_\_\_\_\_

10. \_\_\_\_\_

11. \_\_\_\_\_

12. \_\_\_\_\_

13. \_\_\_\_\_