

Chapter 14

Use with Section 2


REINFORCEMENT

● Kingdom Fungi

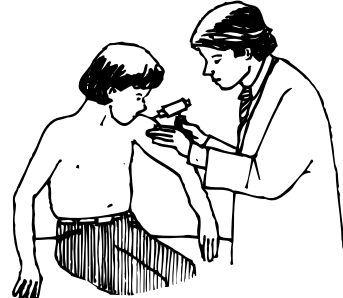
On the line below each diagram, write the name of the fungi division that is identified with the diagram.



1. _____




2. _____



3. _____



4. _____



5. _____

6. Why are saprophytes good for the environment? _____

7. In what conditions do fungi grow best? _____

8. If you find a mushroom in the wild, why shouldn't you eat it? _____

9. What makes up a lichen? _____

10. What is an ascus? _____

11. What is a basidium? _____

12. What are sporangia? _____

13. How does yeast cause bread to rise? _____

14. What kind of fungi causes athlete's foot? _____