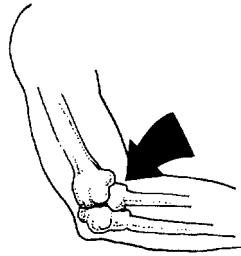


Chapter 18

Use with Section 1

REINFORCEMENT**• The Skeletal System**

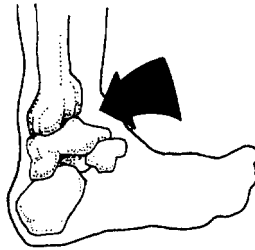
Listed below are the four kinds of movable joints. Label the illustrations.



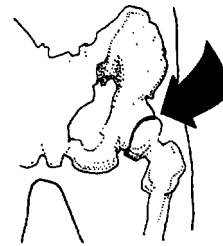
1. _____



2. _____



3. _____



4. _____

Describe each type of joint.

5. pivot joint: _____

6. ball-and-socket joint: _____

7. hinge joint: _____

8. gliding joint: _____

List the five major functions of the skeletal system.

9. _____

10. _____

11. _____

12. _____

13. _____