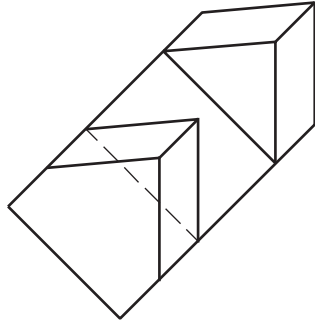
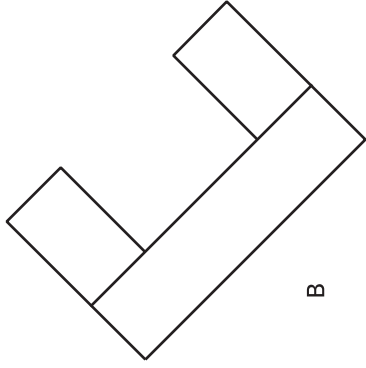

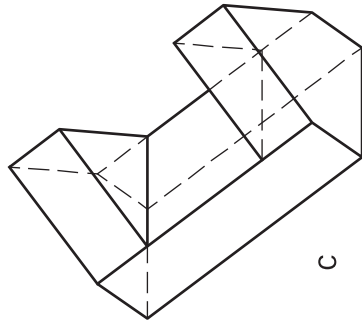


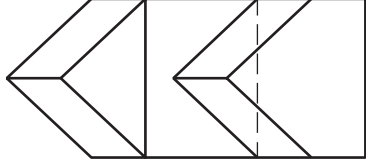
A



C



B



Problem 119. Figure A shows three normal views of an object. Figure B shows the object with the front view revolved 45° and the top and right-side views projected from it. In Figure C, the top view is rotated 45° clockwise from its position in Figure B and the front view is projected from it. Develop the right-side view by projecting points from the top and front views in Figure C.